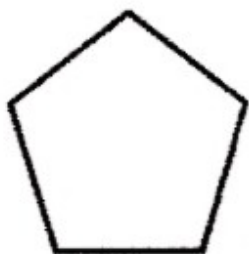


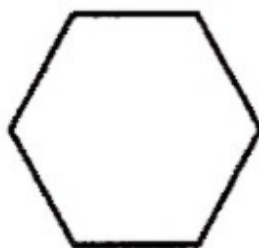
$$n = 3; d = 0$$



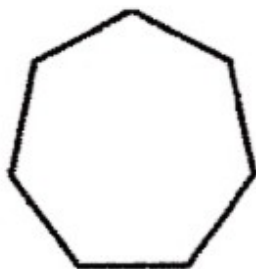
$$n = 4; d = \square$$



$$n = 5; d = \square$$



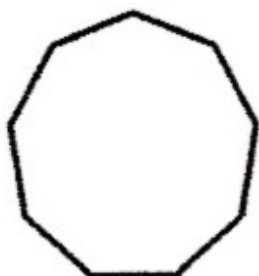
$$n = 6; d = \square$$



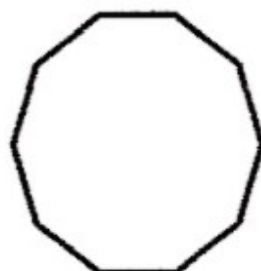
$$n = 7; d = \square$$



$$n = 8; d = \square$$



$$n = 9; d = \square$$



$$n = 10; d = 35$$