



Geometry

Unit 1—Tangrams

Exit Slip


Name: _____

Period: _____

I CAN distinguish between types of quadrilaterals (rectangle, square, rhombus, parallelogram, trapezoid, kite).

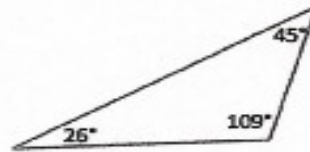
Label each shape in the box to the right of the diagram. Also, explain your choice.

1.



1.

8.



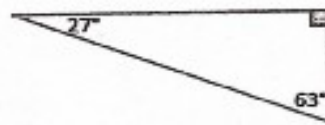
8.

2.



2.

9.



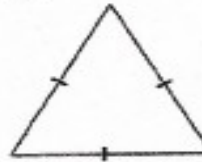
9.

3.



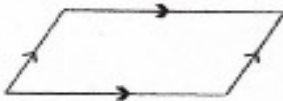
3.

10.



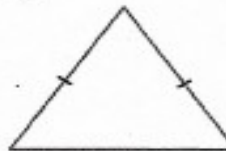
10.

4.



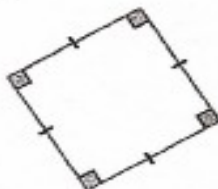
4.

11.



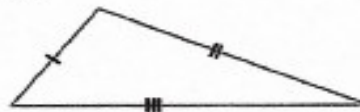
11.

5.




5.

12.



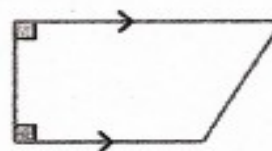
12.

6.



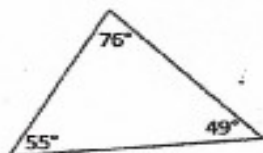
6.

13.



13.

7.



7.