


Day 6: Unit 2 - Angle Vocabulary

Sketch an example of Adjacent angles:



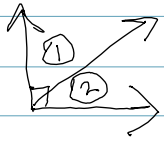
1 shared side
 \overrightarrow{BC}

Sketch an example of a Linear pair of angles:



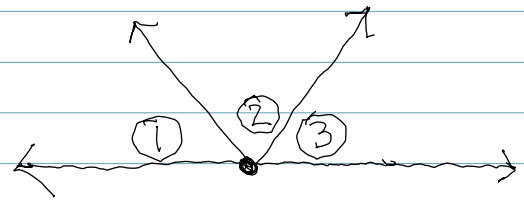
180°
 $180 = \angle 1 + \angle 2$

Sketch an example of complementary angles:



$90 = \angle 1 + \angle 2$

Describe the relationship between $\angle 1$ and $\angle 3$



$180 = \angle 1 + \angle 2 + \angle 3$
supplementary
Linear pair