



Geometry

Unit 2—angle relationships

Entry task

Name: _____

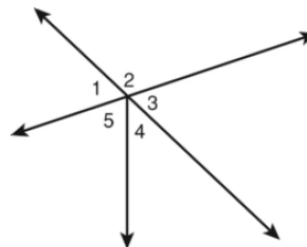
Period: _____

Tell whether the indicated angles are only adjacent, are adjacent and form a linear pair, or are not adjacent.

4. $\angle 5$ and $\angle 4$ _____

5. $\angle 1$ and $\angle 4$ _____

6. $\angle 2$ and $\angle 3$ _____

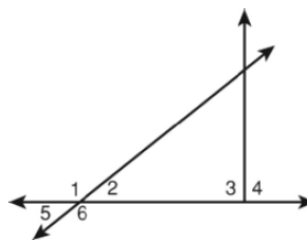


Name each of the following.

7. a pair of vertical angles _____

8. a linear pair _____

9. an angle adjacent to $\angle 4$ _____



Geometry

Unit 2—angle relationships

Entry task

Name: _____

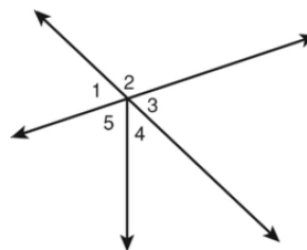
Period: _____

Tell whether the indicated angles are only adjacent, are adjacent and form a linear pair, or are not adjacent.

4. $\angle 5$ and $\angle 4$ _____

5. $\angle 1$ and $\angle 4$ _____

6. $\angle 2$ and $\angle 3$ _____



Name each of the following.

7. a pair of vertical angles _____

8. a linear pair _____

9. an angle adjacent to $\angle 4$ _____

