



Geometry

Unit 4—similar aa, sas, sss

Day 4—exit slip

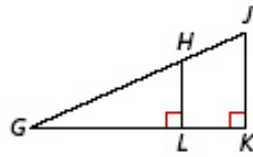
Name: _____

Period: _____

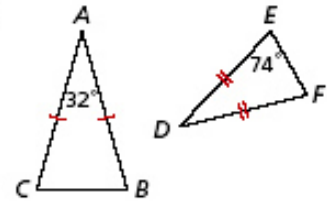


Explain why the triangles are similar and write a similarity statement.

11.



12.



Geometry

Unit 4—similar aa, sas, sss

Day 4—exit slip

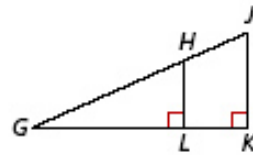
Name: _____

Period: _____

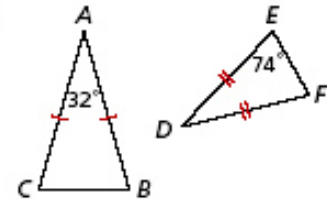


Explain why the triangles are similar and write a similarity statement.

11.



12.



Geometry

Unit 4—similar aa, sas, sss

Day 4—exit slip

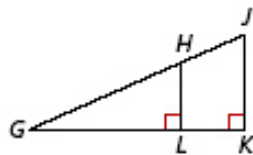
Name: _____

Period: _____



Explain why the triangles are similar and write a similarity statement.

11.



12.

