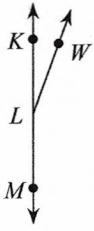


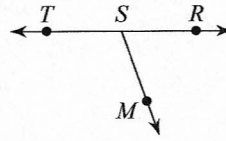
Assignment

Date _____ Period _____

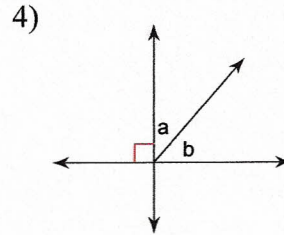
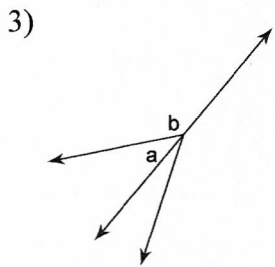
- 1) $m\angle KLM = 180^\circ$ and $m\angle WLM = 160^\circ$.
Find $m\angle KLW$.



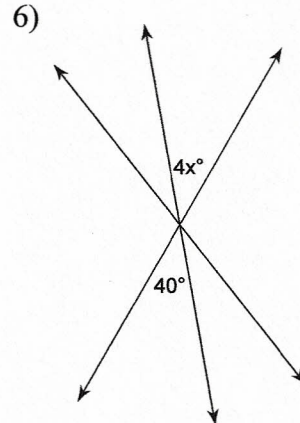
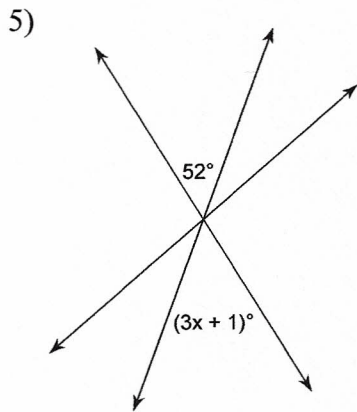
- 2) Find x if $m\angle RSM = 10x + 10$,
 $m\angle RST = 31x - 6$, and $m\angle MST = 110^\circ$.



Name the relationship: complementary, linear pair, vertical, or adjacent.



Find the value of x .



Find the measure of angle b .

