



Geometry
Unit 1—Tangrams
Entry Task

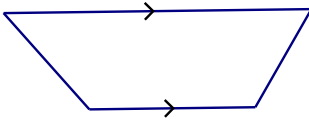
Name: _____

Period: _____

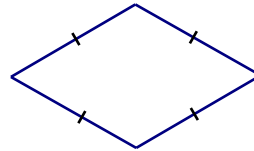
I CAN distinguish between types of quadrilaterals (rectangle, square, rhombus, parallelogram, trapezoid, kite).

Given the following, state the most specific name that describes the shape: and describe what the labels mean in each figure:

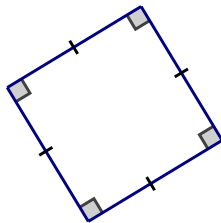
R



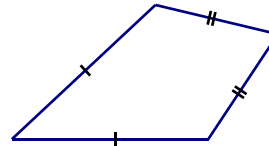
S



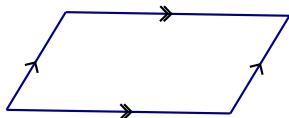
T



X



Y



Z

