



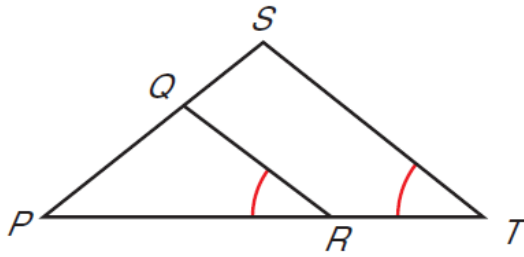
Geometry

Unit 4—similar aa, sas, sss

Day 3—entry task

Name: _____

Period: _____



We want to show that the two triangles shown are indeed similar.....



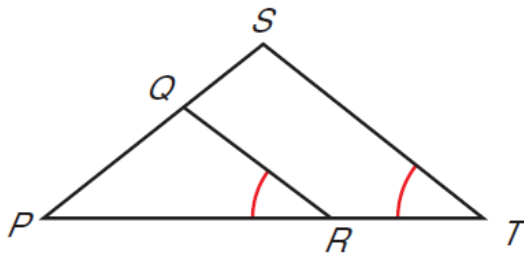
Geometry

Unit 4—similar aa, sas, sss

Day 3—entry task

Name: _____

Period: _____



We want to show that the two triangles shown are indeed similar.....



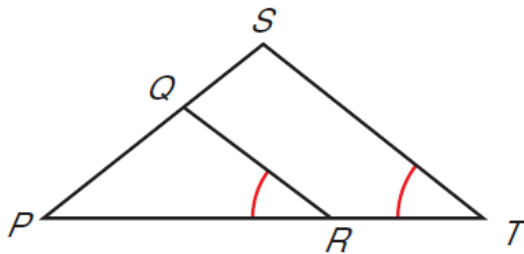
Geometry

Unit 4—similar aa, sas, sss

Day 3—entry task

Name: _____

Period: _____



We want to show that the two triangles shown are indeed similar.....