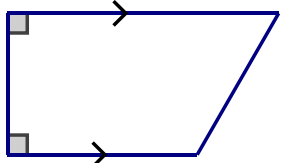
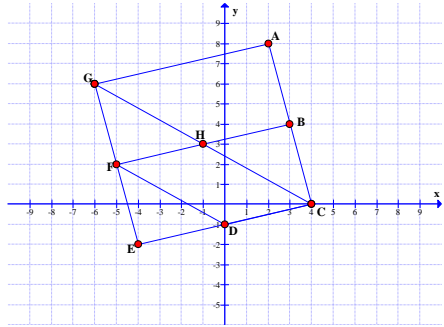


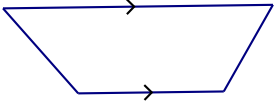
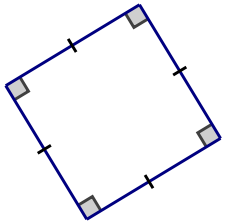
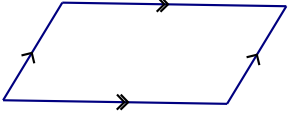
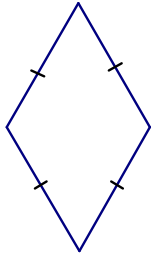
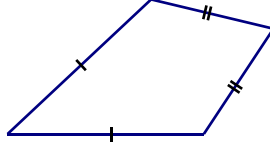
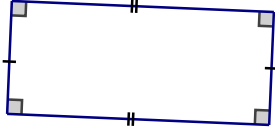
NAME _____

PERIOD _____

LEARNING TARGET	SAMPLE SITUATION	MY UNDERSTANDING				MY EVIDENCE OF UNDERSTANDING
		Not sure how to do this	I can do this with help	I can do it myself	I can teach others	
1. I know the undefined terms of geometry: point, line, and plane.	Sate the undefined terms of geometry.					

LEARNING TARGET	SAMPLE SITUATION	MY UNDERSTANDING		MY EVIDENCE OF UNDERSTANDING
<p>2. I can recognize that definitions of geometric figures contain necessary and sufficient conditions.</p>	<p>A. What kind of shape is shown below? Explain why.</p>  <p>B. What types of triangles are created if one diagonal is drawn in a rhombus?</p>  <p>C. Find the following figures in the drawing above:</p> <ol style="list-style-type: none"> Two isosceles right triangles that have different areas. A square. An isosceles trapezoid. A parallelogram (that is not a square). A rectangle (that is not a square). <p>D. Choose the best answer: Which of the following contain necessary and sufficient conditions to define a parallelogram?</p> <p><input type="radio"/> A. A figure with two pairs of opposite sides parallel</p> <p><input type="radio"/> B. A quadrilateral with two pairs of opposite sides parallel</p> <p><input type="radio"/> C. A quadrilateral with two pairs of opposite sides parallel and one right angle.</p> <p><input type="radio"/> D. A quadrilateral with two pairs of opposite sides parallel and two sets of opposite sides equal length.</p>			

LEARNING TARGET	SAMPLE SITUATION	MY UNDERSTANDING				MY EVIDENCE OF UNDERSTANDING

LEARNING TARGET		SAMPLE SITUATION		MY UNDERSTANDING	MY EVIDENCE OF UNDERSTANDING
Unit 1: Target 1A Understanding Shapes of Geometry	3. I can distinguish between the types of quadrilaterals (rectangle, square, rhombus, parallelogram, trapezoid, kite).	<p>Given the following, state the most specific name that describes the shape:</p> <p>R</p>  <p>T</p>  <p>Y</p> 	<p>S</p>  <p>X</p>  <p>Z</p> 	1 2 3 4	

