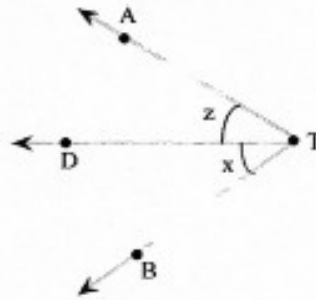




1.

State two other ways to name $\angle x$.



Two other ways to name $\angle x$ are angles .
(Use a comma to separate answers as needed.)

2.

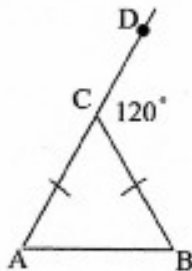
The measure of one of the acute angles in a right triangle is given. Find the measure of the other acute angle.

1. 44.9°

degrees

3.

Find the measure of each angle.



a. $m\angle B$ degrees



Geometry

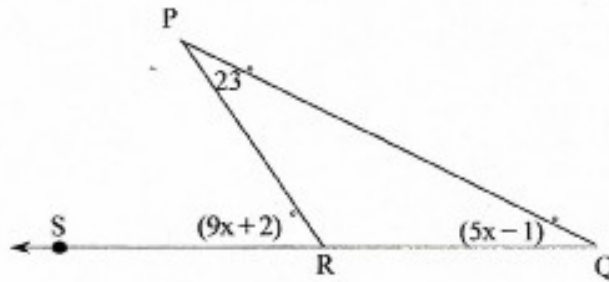
Unit 3—angle practice

Day 11—angle practice

Name: _____

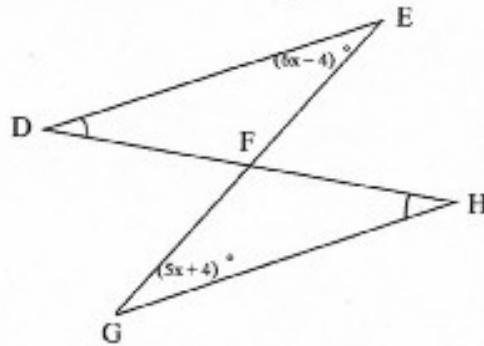
Period: _____

4. Find each angle measure.



a. $m\angle PRS$ degrees

5. Find the measure of each angle.



a. $m\angle E$ and $m\angle G$

		Answer Key
1.	$\angle DTB, \angle BTD$	
2.	101.1	
3.	60	
4.	47	
5.	44°	